

GATE-2011

Question Paper

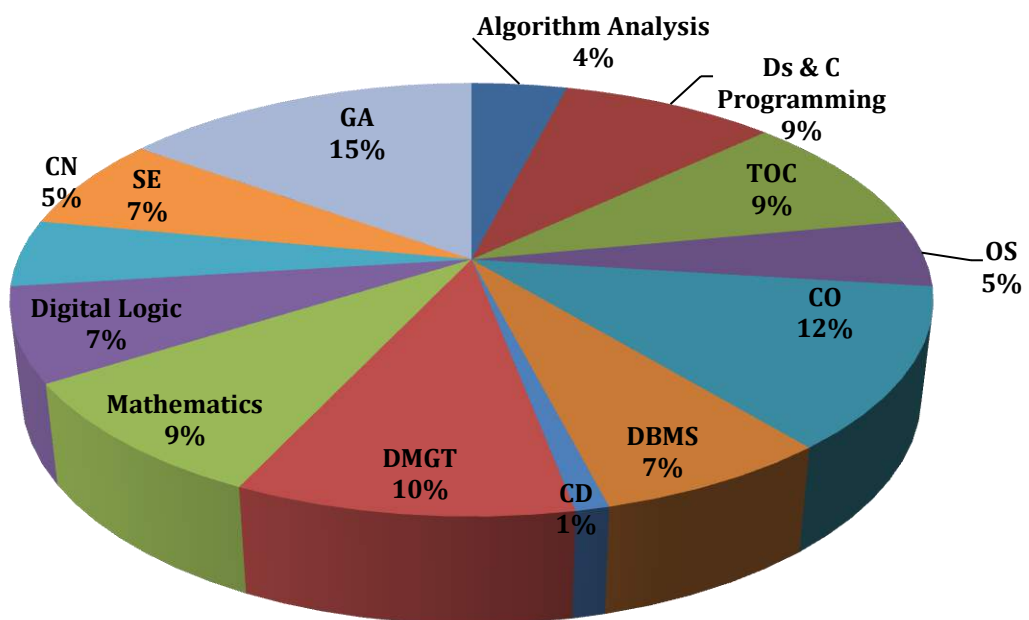
&

Answer Keys

Index

1. Question Paper Analysis
2. Question Paper & Answer keys

Analysis of Gate 2011 Computer Science



GATE-2011- CS

SUBJECT	NO OF QUESTION	Topics Asked in Paper	Total Marks
Algorithm Analysis			
Ds & C Programming	1M:3 2M:5	Data Structure and Algorithm Analysis, Stacks and Queues, Trees, Height Balanced Trees (AVL Trees, B and B+), Priority Queues (Heaps), Sorting Algorithms, Graph Algorithms,	13
Theory of Computation	1M:3 2M:3	Properties of Regular Languages, Context Free Grammars and Languages, Pushdown Automata, Properties of CFL Introduction to Turing Machines	9
Operating System	1M:3 2M:1	Introduction to Operating System, Process Management, Process Synchronization, Threads, CPU Scheduling, Deadlocks, Memory Management & Virtual Memory, File System, Protection and Security	5
Computer Organization	1M:2 2M:5	Introduction to Computer Organization, Pipeline, Instruction Types, Addressing Modes, I/O Data Transfer, Miscellaneous	12
Database and Management System	1M:1 2M:3	ER Diagrams, Functional Dependencies & Normalization, SQL, Relational Algebra & Relational Calculus, Transactions And Concurrency Control, File Structures,	7
Compiler Design	1M:1 2M:0	Introduction to Compiling, Lexical Analysis, Syntax Analysis, Syntax Directed Translation, Run Time Environment, Intermediate Code Generation, Code Optimization,	1
DMGT	1M:2 2M:4	Mathematical Logic, Combinatorics, Sets & Relations, Graph Theory	10
Mathematics	1M:1 2M:4	Linear Algebra, Probability and Distribution, Numerical Methods, Calculus	9
Digital Logic	1M:3 2M:2	Boolean algebra & Karnaugh maps, Logic Gates, Logic Gates family, Combinational and Sequential digital Circuits,	7
Computer Network	1M:1 2M:2	Introduction, Medium Access Sublayer, The Data Link Layer, (Flow Control And Error Control), Routing And Congestion Control, TCP/IP, UDP And Sockets, IP(v4), Application Layer, Network Security	5
Software Engineering	1M:5 2M:1	Software and Software Engineering, Requirement Modeling, Process Modeling, Project Management, Testing	7
General Aptitude	1M:5 2M:5	Numerical Ability, Verbal Ability	15
Total	65		100

GATE 2011 Examination Computer Science

Q.1 - Q.25 Carry One Mark each.

1. In a compiler, keywords of a language are recognized during

(A) Parsing of the program	(C) The lexical analysis of the program
(B) The code generation	(D) Dataflow analysis

[Ans. C]

2. A layer-4 firewall (a device that can look at all protocol headers up to the transport layer) **CANNOT**
 - (A) Block entire HTTP traffic during 9:00 PM and 5:00 AM
 - (B) Block all ICMP traffic
 - (C) Stop incoming traffic from a specific IP address but allow outgoing traffic to the same IP address
 - (D) Block TCP traffic from a specific user on a multi-user system during 9:00PM and 5:00AM

[Ans. D]

3. If two fair coins flipped and at least one of the outcomes is known to be a head, what is the probability that both outcomes are heads?

(A) 1/3	(C) 1/4
(B) 1/2	(D) 2/3

[Ans. A]

4. Consider different activities related to email

m1: Send an email from a mail client to a mail server
 m2: Download an email form mailbox server to mail client
 m3: Checking email in a web browser

Which is the application level protocol used in each activity?

(A) m1: HTTP m2: SMTP m3: POP	(C) m1: SMTP m2: POP m3: HTTP
(B) m1: SMTP m2: FTP m3: HTTP	(D) m1: POP m2: SMTP m3: IMAP

[Ans. C]

5. A company needs to develop a strategy for software product development for which it has a choice of two programming languages L_1 and L_2 . The number of lines of code (LOC) developed using L_2 is estimated to be twice the LOC developed with L_1 . The product will have to be maintained for five years. Various parameters for the company are given in the table below.

Parameter	Language L_1	Language L_2
Man years needed for development	LOC/10000	LOC/10000
Development Cost per man year	\$10,00,000	\$7,50,000
Maintenance time	5 years	5 years
Cost of maintenance per year	1,00,000	50,000

Total cost of the project includes cost of development and maintenance. What is the LOC for L1 for which the cost of the project using L1 is equal to the cost of the project using L2?

- (A) 4000 (C) 4333
(B) 5000 (D) 4667

[Ans. B]

6. Let the time taken to switch between user and kernel modes of execution be t_1 while the time taken to switch between two processes be t_2 . Which of the following is TRUE?

- (A) $t_1 > t_2$
(B) $t_1 = t_2$
(C) $t_1 < t_2$
(D) nothing can be said about the relation between t_1 and t_2

[Ans. C]

7. A company needs to develop digital signal processing software for one of its newest inventions. The software is expected to have 40000 lines of code. The company needs to determine the effort in person-months needed to develop this software using the basic COCOMO model. The multiplicative factor for this model is given as 2.8 for the software development on embedded systems, while the exponentiation factor is given as 1.20. What is the estimated effort in person -months?

- (A) 234.25 (C) 287.80
(B) 932.50 (D) 122.40

[Ans. A]

8. Which of the following pairs have **DIFFERENT** expressive power?

- (A) Deterministic finite automata (DFA) and Non-deterministic finite automata (NFA)
(B) Deterministic push down automata (DPDA) and Non-deterministic push down automata (NPDA)
(C) Deterministic single-tape Turing machine and Non-deterministic single-tape Turing machine
(D) Single-tape Turing machine and multi-tape Turing machine

[Ans. B]

9. HTML (Hyper Text Markup Language) has language elements which permit certain actions other than describing the structure of the web document. Which one of the following actions is NOT supported by pure HTML (without any server or client side scripting) pages?

- (A) Embed web objects from different sites into the same page
(B) Refresh the page automatically after a specified interval
(C) Automatically redirect to another page upon download
(D) Display the client time as part of the page

[Ans. D]

10. Which one of the following is NOT desired in a good Software Requirement Specifications (SRS) document?

- (A) Functional Requirements
(B) Non-Functional Requirements
(C) Goals of Implementation
(D) Algorithms for Software Implementation

[Ans. D]

11. A computer handles several interrupt sources of which of the following are relevant for this question.

- Interrupt from CPU temperature sensor (raises interrupt if CPU temperature is too high)
- Interrupt from Mouse (raises interrupt if the mouse is moved or a button is pressed)
- Interrupt from Keyboard (raises interrupt when a key is pressed or released)
- Interrupt from Hard Disk (raises interrupt when a disk read is completed)

Which one of these will be handled at the **HIGHEST** priority?

- (A) Interrupt from Hard Disk
 (B) Interrupt from Mouse
 (C) Interrupt from Keyboard
 (D) Interrupt from CPU temperature sensor

[Ans. D]

12. Consider a relational table with a single record from each registered student with the following attributes.

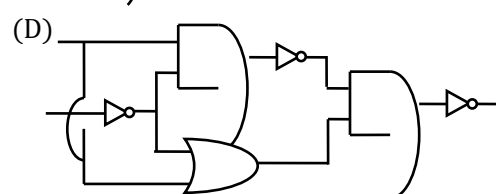
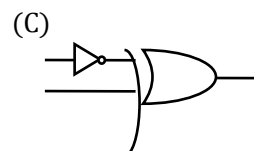
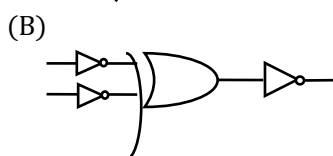
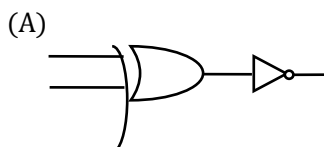
1. Registration_Num: Unique registration number of each registered student
2. UID: Unique identity number, unique at the national level for each citizen
3. BankAccount_Num: Unique account number at the bank. A student can have multiple accounts or joint accounts. This attribute stores the primary account number
4. Name: Name of student
5. Hostel_Room: Room number of the hostel

Which of the following options is **INCORRECT**?

- (A) BankAccount_Num is a candidate key
 (B) Registration_Num can be a primary key
 (C) UID is a candidate key if all students are from the same country
 (D) If S is a superkey such that $S \cap \text{UID}$ is NULL then $S \cup \text{UID}$ is also a superkey

[Ans. A]

13. Which one of the following circuits is NOT equivalent to a 2-input XNOR (exclusive NOR) gate?



[Ans. D]

14. The simplified SOP (Sum Of Product) form of the Boolean expression

$$(P+\bar{Q} + \bar{R}).(P+\bar{Q} + R). (P+Q+\bar{R})$$

- (A) $(\bar{P}.Q + \bar{R})$ (C) $(\bar{P}.Q + R)$
 (B) $(P+\bar{Q}.\bar{R})$ (D) $(P.Q+R)$

[Ans. B]

15. The minimum number of D flip-flops needed to design a mod-258 counter is

- (A) 9 (C) 512
(B) 8 (D) 258

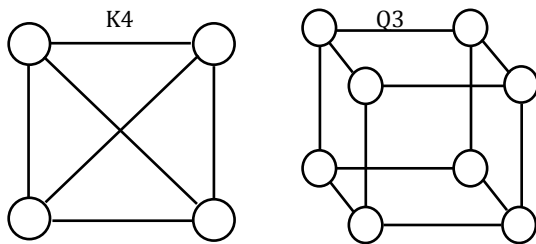
[Ans. A]

16. A thread is usually defined as a “light weight process” because an operating system (OS) maintains smaller data structures for a thread than for a process. In relation to this, which of the following is TRUE?

- (A) On per-thread basis, OS maintains only CPU register state
(B) The OS does not maintain a separate stack for each thread
(C) On per-thread basis, the OS does not maintain virtual memory state
(D) On per-thread basis, the OS maintains only scheduling and accounting information

[Ans. A]

17. K4 and Q3 are graph with the following structures.



Which one of the following statements is TRUE in relation to these graphs?

- (A) K4 is planar while Q3 is not
(B) Both K4 and Q3 are planar
(C) Q3 is planar while K3 is not
(D) Neither K4 nor Q3 is planar

[Ans. B]

18. If the difference between the expectation of the square of a random variable ($E[X^2]$) and the square of the expectation of the random variable ($E[X]^2$) is denoted by R, then

- (A) $R = 0$ (C) $R \geq 0$
(B) $R < 0$ (D) $R > 0$

[Ans. C]

19. The lexical analysis for a modern computer language such as Java needs the power of which one of the following machine models in a necessary and sufficient sense?

- (A) Finite state automata (C) Non-deterministic pushdown automata
(B) Deterministic pushdown automata (D) Turing machine

[Ans. A]

20. Let the page fault service time be 10 ms in a computer with average memory access time being 20 ns. If one page fault is generated for every 10^6 memory accesses, what is the effective access time for the memory?

- (A) 21 ns (C) 23 ns
(B) 30 ns (D) 35 ns

[Ans. B]

21. Consider a hypothetical processor with an instruction of type LW R1, 20(R2), which during execution reads a 32-bit word from memory and stores it in a 32-bit register R1. The effective address of the memory location is obtained by the addition of a constant 20 and the contents of register R2. Which of the following best reflects the addressing mode implemented by this instruction for the operand in memory?
- (A) Immediate Addressing
 - (B) Register Addressing
 - (C) Register Indirect Scaled Addressing
 - (D) Base Indexed Addressing

[Ans. D]

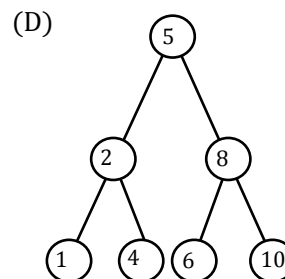
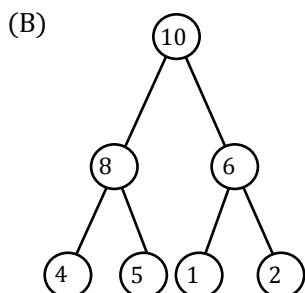
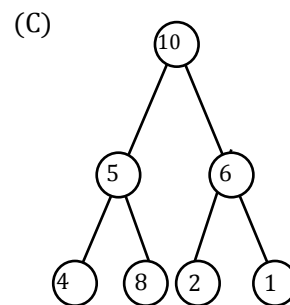
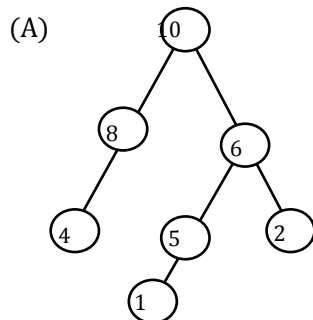
22. Which does the following fragment of C program print?

```
chart c[] = "GATE2011";
char *p = c;
printf("%s", p + p[3] - p[1]);
```

- (A) GATE2011
- (B) E2011
- (C) 2011
- (D) 011

[Ans. C]

23. A max-heap is a heap where the value of each parent is greater than or equal to value of its children. Which of the following is a max-heap?



[Ans. B]

24. Let P be a regular language and Q be a context-free language such that $Q \subseteq P$. (For example, let P be the language represented by the regular expression p^*q^* and Q be $\{p^nq^n | n \in \mathbb{N}\}$). Then which of the following always regular?

- (A) $P \cap Q$
- (B) $P - Q$
- (C) $\Sigma^* - P$
- (D) $\Sigma^* - Q$

[Ans. C]

25. An algorithm to find the length of the longest monotonically increasing sequence of number in an array $A[0 : n-1]$ is given below.

Let L_i denote the length of the longest monotonically increasing sequence starting at index i in the array.

Initialize $L_{n-1} = 1$

For all i such that $0 \leq i \leq n-2$

$$L_i = \begin{cases} 1 + L_{i+1} & \text{if } A[i] < A[i + 1] \\ 1 & \text{otherwise} \end{cases}$$

Finally the length of the longest monotonically increasing sequence is $\text{Max}(L_0, L_1, \dots, L_{n-1})$

Which of the following statements is TRUE ?

- (A) The algorithm uses dynamic programming paradigm
- (B) The algorithm has a linear complexity and uses branch and bound paradigm
- (C) The algorithm has a non-linear polynomial complexity and uses branch and bound paradigm
- (D) The algorithm uses divide and conquer paradigm.

[Ans. A]

Q.26 - Q.55 Carry Two Mark each.

26. Consider the languages L_1 , L_2 and L_3 as given below.

$$L_1 = \{0^p 1^q \mid p, q \in \mathbb{N}\},$$

$$L_2 = \{0^p 1^q \mid p, q \in \mathbb{N} \text{ and } p = q\} \text{ and}$$

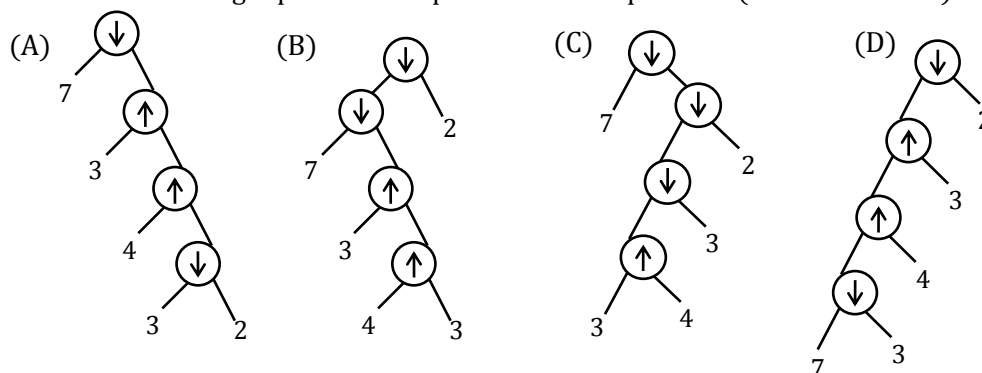
$$L_3 = \{0^p 1^q 0^r \mid p, q, r \in \mathbb{N} \text{ and } p = q = r\}.$$

Which of the following statements is NOT TRUE?

- (A) Push Down Automata (PDA) can be used to recognize L_1 and L_2
- (B) L_1 is a regular language
- (C) All the three languages are context free
- (D) Turing machines can be used to recognize all the languages

[Ans. C]

27. Consider two binary operators ' \uparrow ' and ' \downarrow ' with the precedence of operator \downarrow being lower than that of the operator \uparrow . Operator \uparrow is right associative while operator \downarrow is left associative. Which one of the following represents the parse tree for expression $(7 \downarrow 3 \uparrow 4 \uparrow 3 \downarrow 2)$



[Ans. B]

28. On a non-pipelined sequential processor, a program segment, which is a part of the interrupt service routine, is given to transfer 500 bytes from an I/O device to memory.

Initialize the address register

Initialize the count to 500

LOOP: Load a byte from device

Store in memory at address given by address register

Increment the address register

Decrement the count

If count! = 0 go to LOOP

Assume that each statement in this program is equivalent to a machine instruction which takes one clock cycle to execute if it is a non-load/store instruction. The load-store instructions take two clock cycles to execute.

The designer of the system also has an alternate approach of using the DMA controller to implement the same transfer. The DMA controller requires 20 clock cycles for initialization and other overheads. Each DMA transfer cycle takes two clock cycles to transfer one byte of data from the device to the memory.

What is the approximate speedup when the DMA controller based design is used in place of the interrupt driven program based input-output?

- (A) 3.4 (C) 5.1
(B) 4.4 (D) 6.7

[Ans. A]

29. We are given a set of n distinct elements and an unlabeled binary tree with n nodes. In how many ways we can populate the tree with the given set so that it becomes a binary search tree?

- (A) 0 (C) $n!$
(B) 1 (D) $\frac{1}{n+1} \cdot 2^n C_n$

[Ans. B]

30. Which of the following option is **correct** given three positive integers x, y and z , and a predicate $P(x) = \neg(x = 1) \wedge \forall y (\exists z(x = y * z))$

$\Rightarrow (y = x) \vee (y = 1)$

- (A) $P(x)$ being true means that x is a prime number
(B) $P(x)$ being true means that x is number other than 1
(C) $P(x)$ is always true irrespective of the value of x
(D) $P(x)$ being true means that x has exactly two factors other than 1 and x

[Ans. A]

31. Given $i = \sqrt{-1}$, what will be the evaluation of the definite integral $\int_0^{\pi/2} \frac{\cos x + i \sin x}{\cos x - i \sin x} dx$?

- (A) 0 (C) $-i$
(B) 2 (D) i

[Ans. D]

32. Consider a database table T containing two columns X and Y each of type integer. After the creation of the table, one record ($X = 1, Y = 1$) is inserted in the table. Let MX and MY denote the respective maximum values of X and Y among all records in the table at any point in time. Using MX and MY, new records are inserted in the table 128 times with X and Y values being $MX+1, 2*MY+1$ respectively. It may be noted that each time after the insertion, values of MX and MY change. What will be the output of the following SQL query after the steps mentioned above are carried out?

SELECT Y FROM T WHERE X=7;

- (A) 127 (C) 129
(B) 255 (D) 257

[Ans. A]

33. Consider a finite sequence of random values $X = [x_1, x_2, \dots, x_n]$. Let μ_x be the mean and σ_x be the standard deviation of X. Let another finite sequence Y of equal length be derived from this as $y_i, a*x_i+b$, where a and b are positive constants. Let μ_y be the mean and σ_y be the standard deviation of this sequence. Which one of the following statements is **INCORRECT**?

- (A) Index position of mode of X in X is the same as the index position of mode of Y in Y.
(B) Index position of median of X in X is the same as the index position of median of Y in Y.
(C) $\mu_y = a\mu_x + b$
(D) $\sigma_y = a\sigma_x + b$

[Ans. D]

34. A deck of 5 cards (each carrying a distinct number from 1 to 5) is shuffled thoroughly. Two cards are then removed one at a time from the deck. What is the probability that the two cards are selected with the number on the first card being one higher than the number on the second card?

- (A) $1/5$ (C) $4/25$
(B) $1/4$ (D) $2/5$

[Ans. A]

35. Consider the following table of arrival time and burst time for three processes P_0, P_1 and P_2 .

Process	Arrival time	Burst time
P_0	0 ms	9 ms
P_1	1 ms	4 ms
P_2	2 ms	9 ms

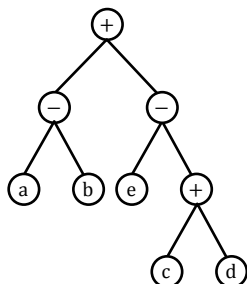
The pre-emptive shortest job first scheduling algorithm is used. Scheduling is carried out only at arrival or completion of processes. What is the average waiting time for the three processes?

- (A) 5.0 ms (C) 6.33 ms
(B) 4.33 ms (D) 7.33 ms

[Ans. A]

36. Consider evaluating the following expression tree on a machine with load-store architecture in which memory can be accessed only through load and store instructions. The variable a, b, c, d and e are initially stored in memory. The binary operator used in this expression tree can be evaluated by the machine only when the operand are in registers. The instructions produce

result only in a register, If no intermediate result can be stored in memory, When is the minimum number of register needed to evaluated this expression?



- (A) 2 (B) 9 (C) 5 (D) 3

[Ans. D]

37. Which of the given options provides the increasing order of asymptotic complexity of functions f_1, f_2, f_3 and f_4 ?

$$f_1(n) = 2^n \quad f_2(n) = n^{3/2}$$

$$f_3(n) = n \log_2 n \quad f_4(n) = n^{\log_2 n}$$

- (A) f_3, f_2, f_4, f_1 (C) f_2, f_3, f_1, f_4
(B) f_3, f_2, f_1, f_4 (D) f_2, f_3, f_4, f_1

[Ans. A]

38. Four matrices M_1, M_2, M_3 and M_4 of dimensions $p \times q, q \times r, r \times s$ and $s \times t$ respectively can be multiplied with several ways with different number of total scalar multiplications. For example when multiplied as

$((M_1 \times M_2) \times (M_3 \times M_4))$, the total number of scalar multiplications is

$pqr + rst + prt$. When multiplied as $((M_1 \times M_2) \times M_3) \times M_4$, the total number of scalar multiplications is

$pqr + prs + pst$.

If $p = 10, q = 100, r = 20, s = 5$ and

$t = 80$, then the minimum number of scalar multiplications needed is

- (A) 248000 (C) 19000
(B) 44000 (D) 25000

[Ans. C]

39. Consider a relational table r with sufficient number of records, having attributes A_1, A_2, \dots, A_n and let $1 \leq p \leq n$. Two queries Q_1 and Q_2 are given below.

$Q_1: \pi_{A_1, \dots, A_p}(\sigma_{A_p=c}(r))$ where c is a constant

$Q_2: \pi_{A_1, \dots, A_p}(\sigma_{c_1 \leq A_p \leq c_2})$ where c_1 and c_2 are constants. The database can be configured to do

ordered indexing on A_p or hashing on A_p . Which of the following statements is **TRUE**?

- (A) Ordered indexing will always outperform hashing for both queries
(B) Hashing will always outperform ordered indexing for both queries
(C) Hashing outperform ordered indexing on Q_1 , but not on Q_2
(D) Hashing will outperform ordered indexing on Q_2 , but not on Q_1

[Ans. C]

40. Consider the matrix as given below.

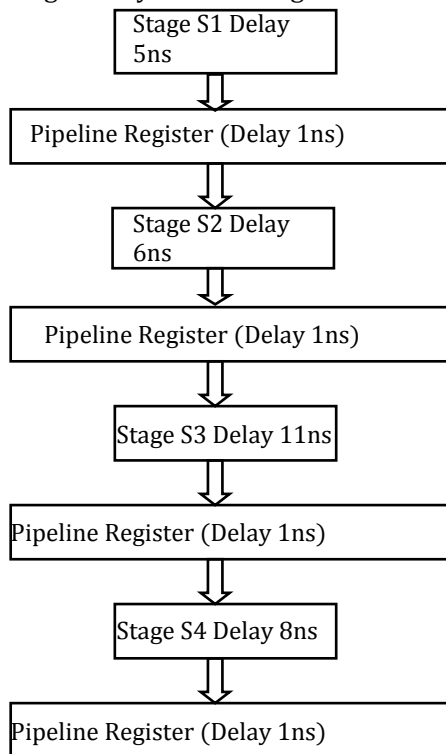
$$\begin{bmatrix} 1 & 2 & 3 \\ 0 & 4 & 7 \\ 0 & 0 & 3 \end{bmatrix}$$

Which one of the following option provides the CORRECTS values of the eigenvalue of the matrix?

- (A) 1,4,3 (B) 3, 7,3 (C) 7,3,2 (D) 1,2,3

[Ans. A]

41. Consider an instruction pipeline with four stages (S1, S2, S3 and S4) each with combinational circuit only. The pipeline registers are required between each stage and at the end of the last stage. Delays for the stages and for the pipeline registers are as given in the figure



What is the approximate speed up of the pipeline in steady state under ideal conditions when compared to the corresponding non-pipeline implementation?

- (A) 4.0 (C) 1.1
(B) 2.5 (D) 3.0

[Ans. B]

42. Definition of a language L with alphabet {a} is given as following

$L = \{a^{nk} | k > 0, \text{ and } n \text{ is a positive integer constant}\}$

What is the minimum number of states needed in a DFA to recognize L?

- (A) $k + 1$ (C) 2^{n+1}
(B) $n + 1$ (D) 2^{k+1}

[Ans. B]

43. An 8KB direct-mapped write-back cache is organized as multiple blocks, each of size 32-bytes. The processor generates 32-bit addresses. The cache controller maintains the tag information for each cache block comprising of the following.

1 Valid bit

1 Modified bit

As many bits as the minimum needed to identify the memory block mapped in the cache.

What is the total size of memory needed at the cache controller to store meta-data (tags) for the cache?

(A) 4864 bits

(C) 6656 bits

(B) 6144 bits

(D) 5376 bits

[Ans. D]

44. An application loads 100 libraries at startup. Loading each library requires exactly one disk access. The seek time of the disk to a random location is given as 10 ms. Rotational speed of disk is 6000rpm. If all 100 libraries are loaded from random locations on the disk, how long does it take to load all libraries? (The time to transfer data from the disk block once the head has been positioned at the start of the block may be neglected.)

(A) 0.50 s

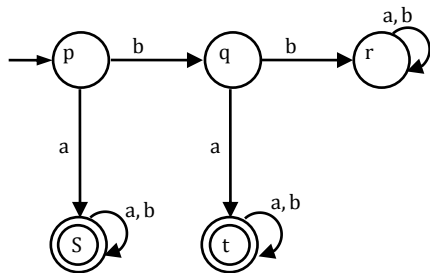
(C) 1.25 s

(B) 1.50 s

(D) 1.00 s

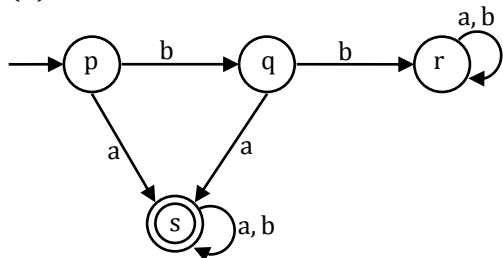
[Ans. B]

45. A deterministic finite automaton (DFA) D with alphabet $\Sigma = \{a,b\}$ is given below:

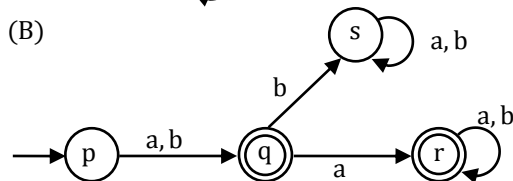


Which of the following finite state machines is a valid minimal DFA which accepts the same language as D ?

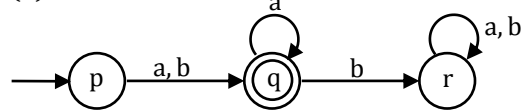
(A)



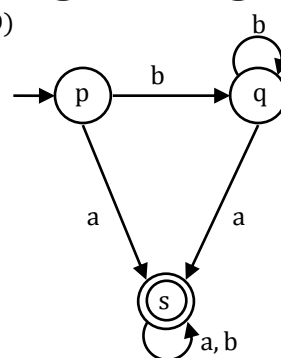
(B)



(C)



(D)



[Ans. A]

46. Database table by name Loan_Records is given below.

Borrower	Bank_ Manager	Loan_ Amount
Ramesh	Sunderajan	10000.00
Suresh	Ramgopal	5000.00
Mahesh	Sunderajan	7000.00

What is the output of the following SQL query?

```
SELECT count(*)
FROM
(SELECT Borrower, Bank_Manager FROM Loan_Records) AS S
NATURAL JOIN
(SELECT Bank_Manager, Loan_Amount FROM Loan_Records) AS T);
```

- (A) 3 (C) 5
(B) 9 (D) 6

[Ans. C]

47. The following is comment written for a C function.

```
/*This function computes the roots of quadratic equation.
ax2 + bx + c = 0 the function stores two real roots in * root1 & * root2 & returns the status of
validity of roots. In handles four different kinds of cases
i. When coefficient a is zero irrespective of discriminant
ii. When discriminant is positive.
iii. When discriminant is zero
iv. When discriminant is negative
```

Only in cases (ii) & (iii) the stored roots are valid otherwise 0 is stored in the roots. The function returns 0 when the roots are valid & -1 otherwise. The function also ensures root1 >= root2
int get_QuadRoots (float a, float b, float c, float *root 1, float *root2)*/

A software test engineer is assigned the job of doing black box testing. He comes up with the following test cases, many of which are redundant

Test case	Input set			Expected output set		
	a	b	c	Root	Root 2	Return value
T ₁	0.0	0.0	7.0	0.0	0.0	-1
T ₂	0.0	1.0	3.0	0.0	0.0	-1
T ₃	1.0	2.0	1.0	-1.0	-1.0	0
T ₄	4.0	-12.0	9.0	1.5	1.5	0
T ₅	1.0	-2.0	-3.0	3.0	-1.0	0
T ₆	1.0	1.0	4.0	0.0	0.0	-1

Which one of the following options provide the set of non - redundant tests using equivalence class partitioning approach from input perspective for black testing?

- (A) T₁, T₂, T₃, T₆ (C) T₂, T₄, T₅, T₆
(B) T₁, T₃, T₄, T₅ (D) T₂, T₃, T₄, T₅

[Ans. C]

Common Data for Question 48 and 49

Consider the following recursive C function that takes two arguments.

```
unsigned int foo (unsigned int n, unsigned int r) {
    if (n>0) return ((n%r)+foo (n/r, r));
    else return 0;
}
```

48. What is the return value of the function foo when it is called as foo (345, 10)?
 (A) 345 (C) 5
 (B) 12 (D) 3

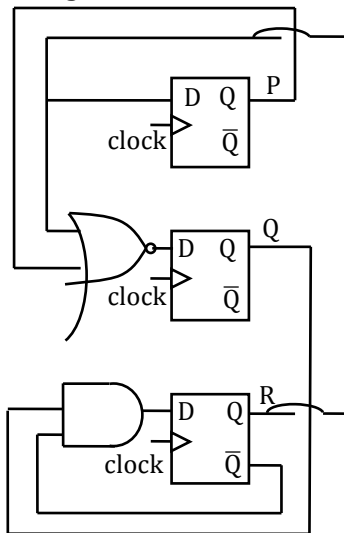
[Ans. B]

49. What is the return value of the function foo when it is called as foo (513,2)?
 (A) 9 (C) 5
 (B) 8 (D) 2

[Ans. D]

Common data for questions 50 and 51

Consider the following circuit involving three D-type flip-flops used in a certain type of counter configuration.



50. If some instance prior to the occurrence of the clock edge, P, Q and R have a value 0, 1 and 0 respectively, what shall be the value of PQR after the clock edge?
 (A) 000 (C) 010
 (B) 001 (D) 011

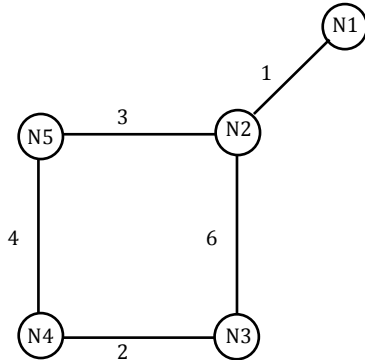
[Ans. D]

51. If all the flip-flops were reset to 0 at power on, what is the total number of distinct output (states) represented by PQR generated by the counter?
 (A) 3 (C) 5
 (B) 4 (D) 6

[Ans. B]

Statement for Linked Answer Q.No. 52 & 53

Consider a network with five nodes, N1 to N5 as shown below



The network uses a Distance Vector Routing protocol. Once the routes have stabilized, the distance vectors at different nodes are as following:

N1: (0, 1, 7, 8, 4)

N2: (1, 0, 6, 7, 3)

N3: (7, 6, 0, 2, 6)

N4: (8, 7, 2, 0, 4)

N5: (4, 3, 6, 4, 0)

Each distance vector is the distance of the best known path at the instance to nodes, N1 to N5, where the distance to itself is 0. Also, all links are symmetric and the cost is identical in both directions. In each round, all nodes exchange their distance vectors with their respective neighbors. Then all nodes update their distance vectors. In between two rounds, any change in cost of a link will cause the two incident nodes to change only that entry in their distance vectors.

52. The cost of link N2–N3 reduces to 2(in both directions). After the next round of updates, what will be the new distance vector at node, N3
- (A) (3, 2, 0, 2, 5) (C) (7, 2, 0, 2, 5)
 (B) (3, 2, 0, 2, 6) (D) (7, 2, 0, 2, 6)

[Ans. A]

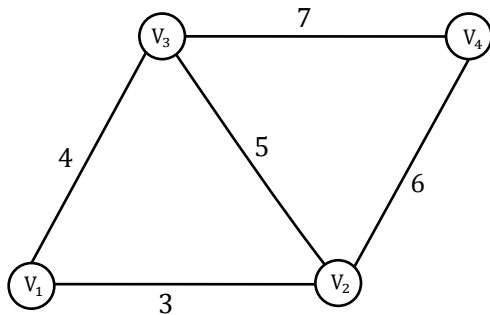
53. After the update in the previous question, the link N1-N2 goes down. N2 will reflect this change immediately in its distance vector as cost, ∞ . After the NEXT ROUND of update, what will be the cost to N1 in the distance vector of N3?
- (A) 3 (C) 10
 (B) 9 (D) ∞

[Ans. C]

Statement for Linked Answer Q.No. 54 & 55

An undirected graph $G(V, E)$ contains $n(n > 2)$ nodes named v_1, v_2, \dots, v_n . Two nodes v_i, v_j are connected if and only if

$0 < |i - j| \leq 2$. Each edge (v_i, v_j) is assigned a weight $i + j$. A sample graph with $n = 4$ is shown below.



54. What will be the cost of the Minimum Spanning Tree (MST) of such a graph with n nodes?

- (A) $\frac{1}{12}(11n^2 - 5n)$ (C) $6n - 11$
 (B) $n^2 - n + 1$ (D) $2n + 1$

[Ans. B]

55. The length of the path from v_5 to v_6 in the MST of previous question with $n = 10$ is

- (A) 11 (C) 31
 (B) 25 (D) 41

[Ans. C]

General Aptitude One Marks Question Q. 56 to Q. 60

56. Which of the following options is closest in meaning to the word Circuitous?

- (A) cyclic (C) confusing
 (B) Indirect (D) crooked

[Ans. B]

57. If $\text{Log}(P) = (1/2) \text{Log}(Q) = (1/3) \text{Log}(R)$, then which of the following options is TRUE?

- (A) $P^2 = Q^3R^2$ (C) $Q^2 = R^3P$
 (B) $Q^2 = PR$ (D) $R = P^2Q^2$

[Ans. B]

58. Choose the most appropriate word(s) from the options given below to complete the following sentence.

I contemplated Singapore for my vacation but decided against it.

- (A) to visit (C) visiting
 (B) having to visit (D) for a visit

[Ans. C]

59. Choose the most appropriate word from the options given below to complete the following sentence. If you are trying to make a strong impression on your audience, you cannot do so by being understated, tentative or

- (A) hyperbolic (C) argumentative
 (B) restrained (D) indifferent

[Ans. B]

60. Choose the word from the options given below that is most nearly opposite in meaning to the given word:

Amalgamate

- (A) merge (C) collect
(B) split (D) separate

[Ans. D]

General Aptitude Two Marks Question Q. 61 to Q. 65

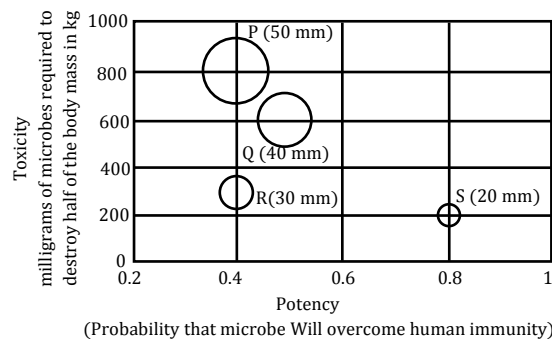
61. Few school curricula include a unit on how to deal with bereavement and grief, and yet all the students at some point in their lives suffer from losses through death and parting.

Based on the above passage which topic would not be included in a unit on bereavement?

- (A) How to write a letter of condolence
(B) What emotional stages are passed through in the healing process
(C) What the leading causes of death are
(D) How to give support to a grieving friend

[Ans. C]

62. P, Q, R and S are four types of dangerous microbes recently found in a human habitat. The area of each circle with its diameter printed in brackets represents the growth of a single microbe surviving human immunity system within 24 hours of entering the body. The danger to human beings varies proportionately with the toxicity, potency and growth attributed to a microbe shown in the figure



A pharmaceutical company is contemplating the development of a vaccine against the most dangerous microbe. Which microbe should the company target in its first attempt?

- (A) P (C) R
(B) Q (D) S

[Ans. A]

63. The variable cost (V) of manufacturing a product varies according to the equation $V = 4q$, where q is the quantity produced. The fixed cost (F) of production of same product reduces with q according to the equation $F = 100/q$. How many units should be produced to minimize the total cost (V+F)?

- (A) 5 (C) 7
(B) 4 (D) 6

[Ans. B]

64. A transporter receives the same number of orders each day. Currently, he has some pending orders (backlog) to be shipped. If he uses 7 trucks, then at the end of the 4th day he can clear all the order. Alternatively, if he uses only 3 trucks, then all the orders are cleared at the end of the 10th day. What is the minimum number of trucks required so that there will be no pending order at the end of the 5th day?

(A) 4 (C) 6
(B) 5 (D) 7

[Ans. C]

65. A container originally contains 10 litres of pure spirit. From this container 1 litre of spirit is replaced with 1 litre of water. Subsequently, 1 litre of the mixture is again replaced with 1 litre of water and this process is repeated one more time. How much spirit is now left in the container?

(A) 7.58 litres (C) 7 litres
(B) 7.84 litres (D) 7.29 litres

[Ans. D]