

**GATE-2013**

**Question Paper**

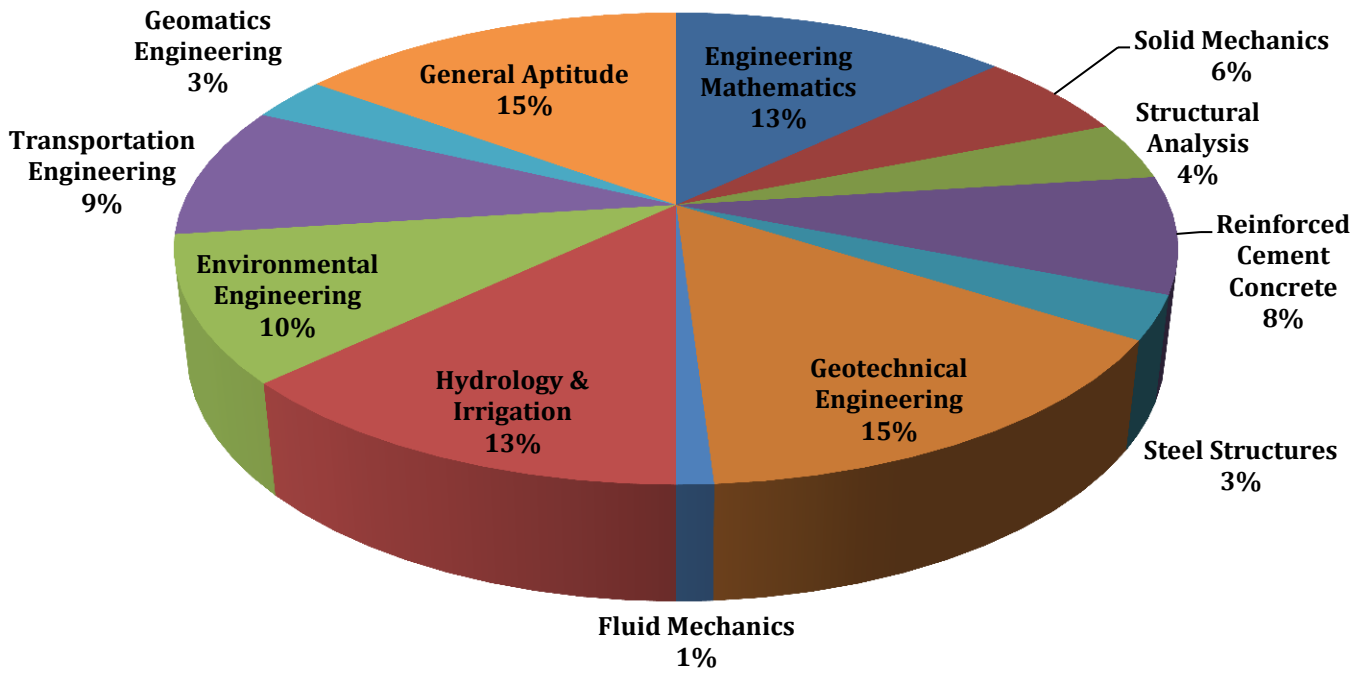
**&**

**Answer Keys**

# Index

1. Question Paper Analysis
2. Question Paper & Answer keys

# ANALYSIS OF GATE 2013 Civil Engineering



**GATE-2013- CE**

SUBJECT	NO OF QUESTION	Topics Asked in Paper	Total Marks
Engineering Mathematics	1M:2 2M:3	Linear Algebra Probability and Distribution Complex Variables	8
Solid Mechanics	1M:3 2M:1	Simple Stress and Strain Trusses and Arches Complex Stress and Strain	5
Structural Analysis	1M:1 2M:6	Slope and Deflection Method Influence Line Diagram and Rolling Loads Matrix Method of Structural Analysis	13
Reinforced Cement Concrete	1M:3 2M:1	Concrete Technology Design of RCC Structures Design of Pre-Stressed Concrete Beams	5
Steel Structures	1M:1 2M:0	Introduction to Steel Structures	1
Geotechnical Engineering	1M:4 2M:6	Three Phase System, Fundamental Definitions and Relationship Permeability and Seepage Pile Foundation Stability of Slopes Earth Pressure Bearing Capacity	16
Fluid Mechanics	1M:2 2M:1	Dimensional Analysis Fluid Kinematics Flow Through Pipes	4
Hydrology & Irrigation	1M:3 2M:4	Open Channel Flow Hydrology water Requirements of Crops	11
Environmental Engineering	1M:2 2M:3	Quality Standards of Water Water Supply and its Treatment Waste Water Treatment Air Pollution and Noise Pollution	8
Transportation Engineering	1M:3 2M:3	Design of Rigid Flexible Pavements Traffic Characteristics Testing and Specifications of Paving Materials Geometric Design of Highway	9
Geomatics Engineering	1M:1 2M:2	Leveling Theodolite & Traversing	5
General Aptitude	1M:5 2M:5	Numerical Ability Verbal Ability	15
<b>Total</b>	<b>65</b>		<b>100</b>

**GATE 2013 Examination****Civil Engineering**

**Q.1 to Q. 25 carries one mark each.**

1. There is no value of  $x$  that can simultaneously satisfy both the given equations. Therefore, find the 'least squares error' solution to the two equations, i.e., find the value of  $x$  that minimizes the sum of squares of the errors in the two equations. \_\_\_\_\_  
 $2x = 3$  and  $4x = 1$   
**[Ans. 0.5]**
2. What is the minimum number of multiplications involved in computing the matrix product  $PQR$ ? Matrix  $P$  has 4 rows and 2 columns, matrix  $Q$  has 2 rows and 4 columns, and matrix  $R$  has 4 rows and 1 column. \_\_\_\_\_  
**[Ans. 16]**
3. A 1 hour rainfall of 10 cm magnitude at a station has return period of 50 year. The probability that 1 hour of rainfall of magnitude 10 cm or more will occur in each of two successive year is  
(A) 0.04 (C) 0.02  
(B) 0.2 (D) 0.0004  
**[Ans. D]**
4. Maximum possible value of Compacting Factor for fresh (green) concrete is  
(A) 0.5 (C) 1.5  
(B) 1.0 (D) 2.0  
**[Ans. B]**
5. As per IS 800:2007, the cross - section in which the extreme fiber can reach the yield stress, but cannot develop the plastic moment of resistance due to failure by local buckling is classified as  
(A) Plastic section (C) Semi - compact section  
(B) Compact section (D) Slender section  
**[Ans. C]**
6. The creep strains are  
(A) Caused due to dead loads only (C) Caused due to cyclic loads only  
(B) Caused due to live loads only (D) Independent of loads  
**[Ans. A]**
7. As per IS 456:2000 for M20 grade concrete and plain bars in tension the design bond stress  $\tau_{bd} = 1.2$  MP. Further, IS 456:2000 permits this design bond stress value to be increased by 60% for HSD bars. The stress in the HSD reinforcing steel bars in tension,  $\sigma_s = 360$  MPa. Find the required development length,  $L_d$ , for HSD bars in terms of the bar diameter,  $\phi$  \_\_\_\_\_  
**[Ans. \*] Range: 46 to 47**

8. The "Plane section remain plane" assumption in bending theory implies  
 (A) Strain profile is linear (C) Both profiles are linear  
 (B) Stress profile is linear (D) Shear deformation is neglected

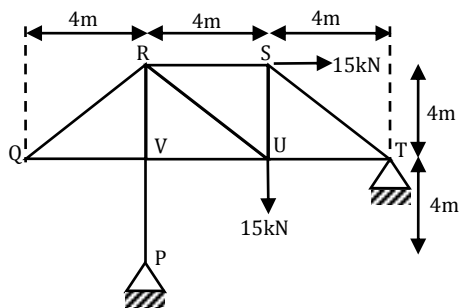
[Ans. A]

9. Two steel column P (length  $L$  and yield strength  $f_y = 250$  MPa) and Q (length  $2L$  and yield strength  $f_y = 500$  MPa) have the same cross-section and end condition the ratio of buckling load of column P to that of column Q is

- (A) 0.5 (C) 2.0  
 (B) 1.0 (D) 4.0

[Ans. D]

10. The pin-jointed 2-D truss is loaded with a horizontal force of 15 kN at joint S and another 15 kN vertical force at joint U, as shown. Find the force in member RS (in kN) and report your answer taking tension as positive and compression as negative. \_\_\_\_\_



[Ans. \*] Range: 0 to 0

11. A symmetric I-section (with width of each flange = 50 mm, thickness of web = 10mm) of steel is subjected to a shear force of 100 kn. Find the magnitude of the shear stress (in  $N/mm^2$ ) in the web at its junction with the top flange. \_\_\_\_\_

12. In its natural condition, a soil sample has a mass of 1.980 kg and a volume of  $0.001m^3$ . After being completely dried in an oven, the mass of the sample is 1.800 kg. Specific gravity  $G$  is 2.7. Unit weight of water is  $10kN/m^3$ . The degree of saturation of the soil is :

- (A) 0.65 (C) 0.54  
 (B) 0.70 (D) 0.61

[Ans. C]

13. The ration  $N_f/N_d$  is known as shape factor, where  $N_f$  is the number of flow lines and  $N_d$  is the number of equipotential drops. Flow net is always drawn with a constant  $b/a$  ratio, where 'b' and 'a' are distance between two consecutive flow lines and equipotential lines, respectively. Assuming that  $b/a$  ratio remains the same, the shape factor of a flow net will change if the

- (A) Upstream and downstream heads are interchanged  
 (B) Soil in the flow space is changed  
 (C) Dimensions of the flow space are changed  
 (D) Head difference causing the flow is changed

[Ans. C]

14. Following statements are made on compacted soils, where in DS stands for the soil compacted on dry side of optimum moisture content and WS stands for the soil compacted on wet side of optimum moisture content. Identify the incorrect statement.
- (A) Soil structure is flocculated on DS and dispersed on WS.  
 (B) Construction of pore water pressure is low on DS and high on WS  
 (C) On drying, shrinkage is high on DS and low on WS  
 (D) On access to water, swelling is high on DS and low on WS

**[Ans. C]**

15. Four columns of a building are to be located within a plot size of 10 m × 10m. The expected load on each columns is 4000 kN. allowable bearing capacity of the soil deposit is 100 kN/m<sup>2</sup>. The type of foundation best suited is
- (A) Isolated foundation (C) Pile foundation  
 (B) Raft foundation (D) Combined foundation

**[Ans. C]**

16. For subcritical flow in an open channel, the control section for gradually varied flow profiles is
- (A) At the downstream end  
 (B) At the upstream end  
 (C) At both upstream and downstream ends  
 (D) At any intermediate section

**[Ans. A]**

17. Group-I contains dimensionless parameters and Group-II contains the ratios.

**Group - I**

**Group - II**

- |                    |  |
|--------------------|--|
| P. Mach Number     | 1. Ratio of inertial force and gravitational force   |
| Q. Reynolds Number | 2. Ration of fluid velocity and velocity of sound    |
| R. Weber Number    | 3. Ratio of inertial force and viscous force         |
| S. Froude Number   | 4. Ratio of inertial force and surface tension force |

The correct match of dimensionless parameters in Group-I with ratios in Group-II is:

- |                                |                                |
|--------------------------------|--------------------------------|
| (A) P - 3, Q - 2, R - 4, S - 1 | (C) P - 2, Q - 3, R - 4, S - 1 |
| (B) P - 3, Q - 4, R - 2, S - 1 | (D) P - 1, Q - 3, R - 2, S - 4 |

**[Ans. C]**

18. For a two dimensional flow field, the stream function  $\psi$  is given as  $\psi = 3/2 (y^2 - x^2)$ . The magnitude of discharge occurring between the stream lines passing through points (0,3) and (3,4) is :

- |       |         |
|-------|---------|
| (A) 6 | (C) 1.5 |
| (B) 3 | (D) 2   |

**[Ans. B]**

19. An isohyet is a line joining points of
- (A) Equal temperature (C) Equal rainfall depth  
 (B) Equal humidity (D) Equal evaporation

**[Ans. C]**

20. Some of the water quality parameters are measured by titrating a water sample with a titrant. Group-I gives a list of parameters and Group-II gives the list of titrants

<b>Group – I</b>	<b>Group – II</b>
P. Alkalinity	1. N/35.5 AgNO <sub>3</sub>
Q. Hardness	2. N/40 Na <sub>2</sub> S <sub>2</sub> O <sub>3</sub>
R. Chloride	3. N/50 H <sub>2</sub> SO <sub>4</sub>
S. Dissolved oxygen	4. N/50 EDTA

The correct match of water quality parameters in Group –I with titrants in Group – II is:

- (A) P – 1, Q – 2, R – 3, S – 4  
(B) P – 3, Q – 4, R – 1, S – 2  
(C) P – 2, Q – 1, R – 4, S – 3  
(D) P – 4, Q – 3, R – 2, S – 1

**[Ans. B]**

21. A water treatment plant is designed to treat 1 m<sup>3</sup>/s of raw water. It has 14 sand filters. Surface area of each filter is 50 m<sup>2</sup>. What is the loading rate (in  $\frac{\text{m}^3}{\text{day/m}^2}$ ) with two filters out of service for routine backwashing? \_\_\_\_\_

**[Ans. \*]**

22. Select the strength parameter of concrete used in design of plain jointed cement concrete pavements from the following choices:

- (A) Tensile strength  
(B) Compressive strength  
(C) Flexural strength  
(D) Shear strength

**[Ans. C]**

23. It was observed that 150 vehicles crossed a particular location of a highway in duration of 30 minutes. Assuming that vehicle arrival follows a negative exponential distribution, find out of number of time headways greater than 5 seconds in the above observation? \_\_\_\_\_

**[Ans. \*]**

24. For two major roads with divided carriageway crossing at right angle, a full clover leaf interchange with four indirect ramps is provided. Following statements are made on turning movements of vehicles to all directions from both roads. Identify the correct statements:

- (A) Merging from left is possible, but diverging to left is not possible  
(B) Both merging from left and diverging to left are possible  
(C) Merging from left is not possible, but diverging to left is possible  
(D) Neither merging left nor diverging to left is possible

**[Ans. B]**

25. The latitude and departure of a line AB are +78 m and –45.1 m, respectively. The whole circle bearing of the line AB is \_\_\_\_\_

- (A) 30°  
(B) 150°  
(C) 210°  
(D) 330°

**[Ans. D]**



**Q. 26 - Q. 55 carry two marks each.**

26. 2D stress at a point is given by a matrix

$$\begin{bmatrix} \sigma_{xx} & \tau_{xy} \\ \tau_{yx} & \sigma_{yy} \end{bmatrix} = \begin{bmatrix} 100 & 30 \\ 30 & 20 \end{bmatrix} \text{MPa}$$

The maximum shear stress in MPa is

- (A) 50 (B) 75 (C) 100 (D) 110

**[Ans. A]**

27. Find the magnitude of the error (correct to two decimal places) in the estimation of following integral using Simpson's 1/3 Rule. Take the step length as 1. \_\_\_\_\_

$$\int_0^4 (x^4 + 10) dx$$

**[Ans. \*] Range 0.52 to 0.55**

28. The solution for  $\int_0^{\pi/6} \cos^4 3\theta \sin^3 6\theta d\theta$  is :

- (A) 0 (B) 1/15 (C) 1 (D) 8/3

29. Find the value of  $\lambda$  such that the function  $f(x)$  is a valid probability density function

$$f(x) = \begin{cases} \lambda(x-1)(2-x) & \text{for } 1 \leq x \leq 2 \\ 0 & \text{otherwise} \end{cases}$$

**[Ans. 6]**

30. Laplace equation for water flow in soil is given below.

$$\frac{\partial^2 H}{\partial x^2} + \frac{\partial^2 H}{\partial y^2} + \frac{\partial^2 H}{\partial z^2} = 0$$

Head  $H$  does not vary in  $y$  and  $z$  directions.

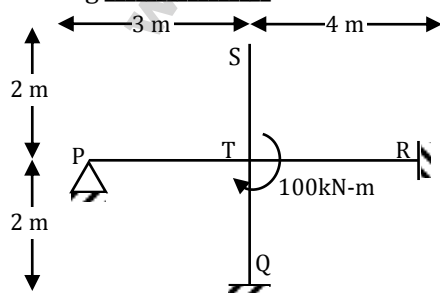
Boundary conditions are: at  $x = 0$ ,

$$H = 5 \text{ m, and } \frac{dH}{dx} = -1$$

What is the value of 'H' at  $x = 1.2$ ? \_\_\_\_\_

**[Ans. \*] Range: 3.8 to 3.8**

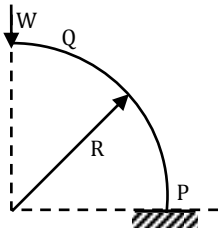
31. All members in the rigid - jointed frame shown are prismatic and have the same flexural stiffness  $EI$ . Find the magnitude of the bending moment at  $Q$  (in kN-m) due to the given loading. \_\_\_\_\_



**[Ans. \*] Range: 25 to 25**

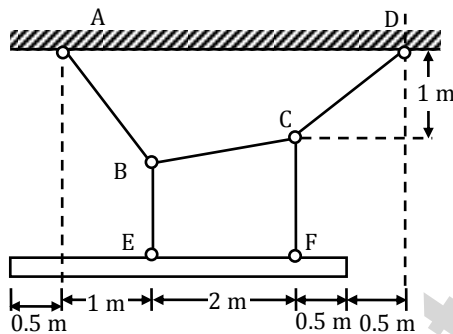
32. A uniform beam ( $EI = \text{constant}$ ) PQ in the form of a quarter circle of radius R is fixed at end P and free at the end Q, where a load W is applied as shown. The vertical downward displacement,  $\delta_Q$ , at the loaded point Q is given by:  $\delta_Q = \beta \left( \frac{WR^3}{EI} \right)$

Find the value of  $\beta$  (correct to 4-decimal places) \_\_\_\_\_



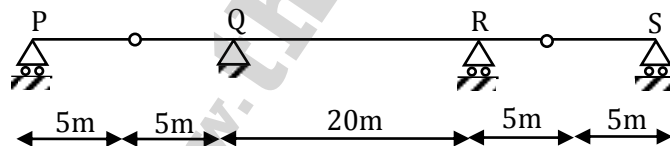
[Ans. \*] Range: 0.785 to 0.786

33. A uniform beam weighing 1800 N is supported at E and F by cable ABCD. Determine the tension (in N) in segment AB of this cable (correct to 1-decimal place). Assume the cables ABCD, BE and CF to be weightless,-----



[Ans. \*] Range: 1310 to 1313

34. Beam PQRS has internal hinges in spans PQ and RS as shown. The beam may be subjected to a moving distributed vertical load of maximum intensity 4 kN/m of any length anywhere on the beam. The maximum absolute value of the shear force (in kN) that can occur due to this loading just to the right of support Q shall be:



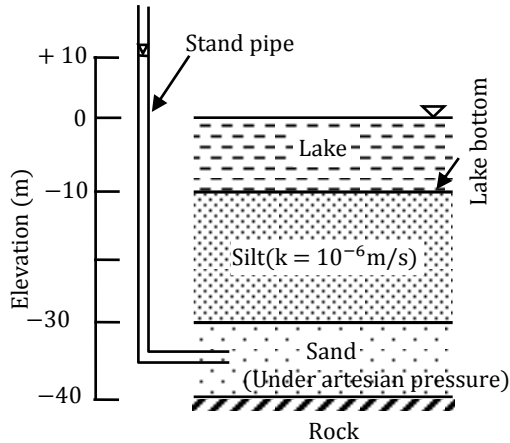
- (A) 30 (C) 45  
(B) 40 (D) 55

[Ans. C]

35. A rectangular concrete beam 250 mm wide and 600 mm deep is pre-stressed by means of 16 high tensile wires, each of 7 mm diameter, located at 200 mm from the bottom face of the beam at a given section. If the effective pre-stress in the wires is 700 MPa, what is the maximum sagging bending moment (in kN-m) (correct to 1-decimal place) due to live load that this section of the beam can withstand without causing tensile stress at the bottom face of the beam? Neglect the effect of dead load of beam \_\_\_\_\_

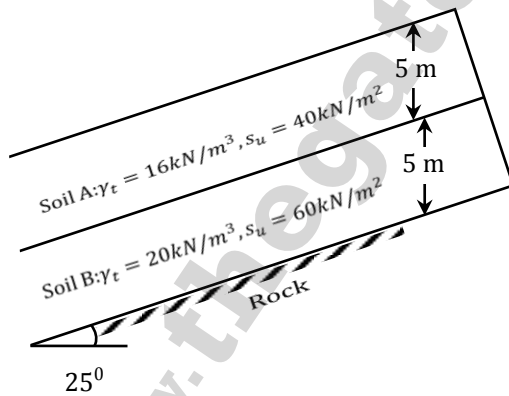
[Ans. \*] Range 85.5 to 86.5

36. The soil profile below a lake with water level at elevation = 0 m and lake bottom at elevation = -10 m is shown in the figure, where  $k$  is the permeability coefficient. A piezometer (stand pipe) installed in the sand layer shows a reading of +10 m elevation. Assume that the piezometric head is uniform in the sand layer. The quantity of water (in  $\text{m}^3/\text{s}$ ) flowing into the lake from the sand layer through the silt layer per unit area of the lake bed is:



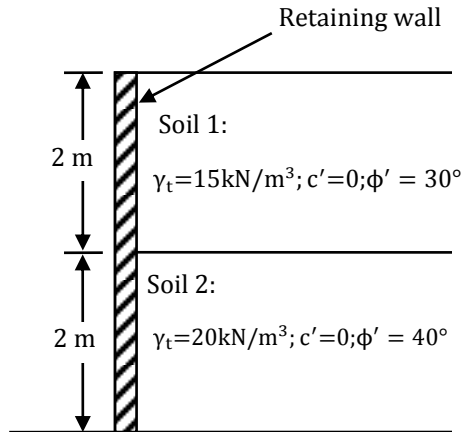
- (A)  $1.5 \times 10^{-6}$  (C)  $1.0 \times 10^{-6}$   
(B)  $2.0 \times 10^{-6}$  (D)  $0.5 \times 10^{-6}$   
**[Ans. D]**

37. The soil profile above the rock surface for a  $25^\circ$  infinite slope is shown in the figure, where  $s_u$  is the undrained shear strength and  $\gamma_t$  is total unit weight. The slip will occur at a depth of



- (A) 8.83 m (C) 7.83 m  
(B) 9.79 m (D) 6.53 m  
**[Ans. A]**

38. Two different soil types (soil 1 and soil 2) are used as backfill behind a retaining wall as shown in the figure, where  $\gamma_t$  is total unit weight and  $c'$  and  $\phi'$  are effective cohesion and effective angle of shearing resistance. The resultant active earth force per unit length (in  $\text{kN}/\text{m}$ ) acting on the wall is



(A) 31.7

(B) 35.2

[Ans. A]

(C) 51.8

(D) 57.0

39. A 2 km long pipe of 0.2 m diameter connects two reservoirs. The difference between water levels in the reservoirs is 8 m. The Darcy – Weisbach friction factor of the pipe is 0.04. Accounting for frictional, entry and exit losses, the velocity in the pipe (in m/s) is:

(A) 0.63

(B) 0.35

[Ans. A]

(C) 2.52

(D) 1.25

40. The normal depth in a wide rectangular channel is increased by 10%. The percentage increase in the discharge in the channel is:

(A) 20.1

(B) 15.4

(C) 10.5

(D) 17.2

[Ans. D]

41. The transplantation of rice requires 10 days and total depth of water required during transplantation is 48 cm. During transplantation, there is an effective rainfall ( useful for irrigation) of 8 cm. the duty of irrigation water (in hectares/cumec) is :

(A) 612

(B) 216

(C) 300

(D) 108

[Ans. B]

42. A settling tank in a water treatment plant is designed for a surface overflow rate of  $30 \text{ m}^3/\text{day} \cdot \text{m}^2$ . Assume specific gravity of sediment particles = 2.65, density of water ( $\rho$ ) =  $1000 \text{ kg/m}^3$ , dynamic viscosity of water ( $\mu$ ) =  $0.001 \text{ N} \cdot \text{s/m}^2$ , and stokes' law is valid. The approximate minimum size of particles that would be completely removed is :

(A) 0.01 mm

(B) 0.02 mm

(C) 0.03 mm

(D) 0.04 mm

[Ans. B]

43. A student began an experiment for determination of 5day,  $20^\circ\text{C}$  BOD on Monday. Since the 5<sup>th</sup> day fell on Saturday, the final DO readings was taken on next Monday. On calculation, BOD (i.e. 7 day,  $20^\circ\text{C}$ ) was found to be 150 mg/L. What would be the 5 day,  $20^\circ\text{C}$  BOD (in mg/L)? Assume value of BOD rate constant (k) at standard temperature of  $20^\circ\text{C}$  as 0.23/day (base e) \_\_\_\_\_

[Ans. \*] Range: 127 to 132

44. Elevation and temperature data for places are tabulated below:

Elevation, m	Temperature, °C
4	21.25
444	15.70

Based on the above data, lapse rate can be referred as:

- (A) Super-adiabatic (C) Sub-adiabatic  
(B) Neutral (D) Inversion

[Ans. A]

45. The percent voids in mineral aggregate (VMA) and percent air voids ( $V_v$ ) in a compacted cylindrical bituminous mix specimen are 15 and 4.5 respectively. The percent voids filled with bitumen (VFB) for this specimen is :

- (A) 24 (C) 54  
(B) 30 (D) 70

[Ans. D]

46. Following bearings are observed while traversing with a compass.

Line	Fore Bearing	Back Bearing
AB	126°45'	308°00'
BC	49°15'	227°30'
CD	340°30'	161°45'
DE	258°30'	78°30'
EA	212°30'	31°45'

After applying the correction due to local attraction, the corrected fore bearing of line BC will be:

- (A) 48°15' (C) 49°45'  
(B) 50°15' (D) 48°45'

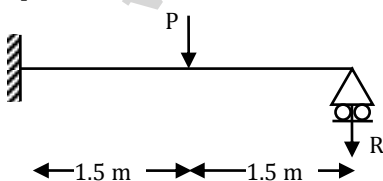
[Ans. D]

47. A theodolite is set up at station A and a 3 m long staff is held vertically at station B. The depression angle reading at 2.5 m marking on the staff is 6°10'. The horizontal distance between A and B is 2200 m. Height of instrument at station A is 1.1 m and R.L. of A is 880.88 m. Apply the curvature and refraction correction, and determine the R.L. of B ( in m ) \_\_\_\_\_

[Ans. \*] Range: 641.9 to 642.3

**Common Data for Questions 48 and 49**

A propped cantilever made of a prismatic steel beam is subjected to a concentrated load P at mid span as shown.



48. If load  $P = 80$  kN, find the reaction  $R$  (in kN) (correct to 1-decimal place) using elastic analysis

[Ans. \*] Range: 25 to 25

49. If the magnitude of load  $P$  is increased till collapse and the plastic moment carrying capacity of steel beam section is  $90 \text{ kN-m}$ , determine reaction  $R$  (in  $\text{kN}$ ) (correct to 1- decimal place) using plastic analysis \_\_\_\_\_  
**[Ans. \*] Range: 60 to 60**

**Common Data for Questions 50 and 51:**

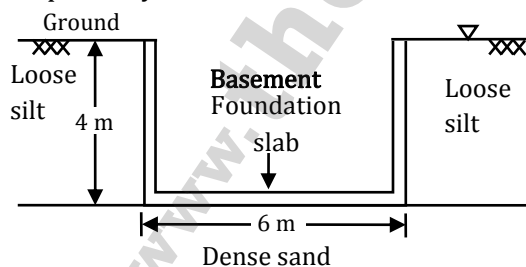
For a portion of national highway where a descending gradient of 1 in 25 meets an ascending gradient of 1 in 20, a valley curve needs to be designed for a vehicle travelling at  $90 \text{ kmph}$  based on the following conditions.

- I. Headlight sight distance equal to the stopping sight distance (SSD) of a level terrain considering length of valley curve  $> \text{SSD}$ .
  - II. Comfort condition with allowable rate of change of centrifugal acceleration is  $0.5 \text{ m/sec}^3$ .  
 Assume total reaction time = 2.5 seconds; coefficient of longitudinal friction of the pavement = 0.35; height of head light of the vehicle = 0.75 m; and beam angle =  $1^\circ$
50. What is the length of valley curve (in m) based on the head light sight distance conditions? \_\_\_\_\_  
**[Ans. \*]**
51. What is the length of valley curve (in m) based on the comfort condition? \_\_\_\_\_  
**[Ans. \*]**

**Statement for Linked Answer Questions 52 and 53:**

A multistory building with a basement is to be constructed. The top 4m consists of loose silt, below which dense sand layer is present up to a great depth. Ground water table is at the surface. The foundation consists of the basement slab of 6 m width which will rest on the top of dense sand as shown in the figure. For dense sand, saturated unit weight =  $20 \text{ kN/m}^3$ , and bearing capacity factors  $N_q = 40$  and  $N_\gamma = 45$ . For loose silt, saturated unit weight =  $18 \text{ kN/m}^3$ ,  $N_q = 15$  and  $N_\gamma = 20$ . Effective cohesion  $c'$  is zero for both soils. Unit weight of water is  $10 \text{ kN/m}^3$ . Neglect shape factor and depth factor.

Average elastic modulus  $E$  and Poisson's ratio  $\mu$  of dense sand is  $60 \times 10^3 \text{ kN/m}^2$  and 0.3 respectively.



52. Using factor of safety = 3, the net safe bearing capacity (in  $\text{kN/m}^2$ ) of the foundation is:  
 (A) 610 (B) 320 (C) 983 (D) 693  
**[Ans. A]**
53. The foundation slab is subjected to vertical downward stresses equal to net safe bearing capacity derived in the above question. Using influence factor  $I_f = 2.0$ , and neglecting embedment depth and rigidity corrections, the immediate settlement of the dense sand layer will be:  
 (A) 58 mm (B) 111 mm (C) 126 mm (D) 179 mm  
**[Ans. B]**

**Statement for Linked Answer Questions 54 and 55**

At a station, storm I of 5 hour duration with intensity 2 cm/ h resulted in a runoff of 4 cm and Storm II of 8 hour duration resulted in a runoff of 8.4 cm. assume that the  $\phi$ -index is the same of both the storms.

54. The  $\phi$ - index ( in cm/h) is :

- (A) 1.2 (C) 1.6  
(B) 1.0 (D) 1.4

**[Ans. A]**

55. The intensity of storm II ( in cm/h) is :

- (A) 2.00 (C) 1.50  
(B) 1.75 (D) 2.25

**[Ans. D]**

**Q. 56-Q.60 carries one mark each.**

56. A number is as much greater than 75 as it is smaller than 117. The number is:

- (A) 91 (C) 89  
(B) 93 (D) 96

**[Ans. D]**

57. The professor ordered to the students to go out of the class.

I II III IV

Which of the above underlined parts of the sentence is grammatically incorrect?

- (A) I (C) III  
(B) II (D) IV

**[Ans. B]**

58. Which of the following options is the closest in meaning to the word given below:

Primeval

- (A) Modern (C) Primitive  
(B) Historic (D) Antique

**[Ans. C]**

59. Friendship, no matter how \_\_\_\_\_ it is, has its limitations.

- (A) cordial (C) secret  
(B) intimate (D) pleasant

**[Ans. B]**

60. Select the pair that best expresses a relationship similar to that expressed in the pair:

**Medicine: Health**

- (A) Science: Experiment (C) Education: Knowledge  
(B) Wealth: Peace (D) Money: Happiness

**[Ans. C]**

**Q. 61 to Q. 65 carry two marks each.**

61. X and Y are two positive real numbers such that  $2X + Y \leq 6$  and  $X + 2Y \leq 8$ . For which of the following values of (X, Y) the function  $(X, Y) = 3X + 6Y$  will give maximum value?
- (A)  $(4/3, 10/3)$  (C)  $(8/3, 10/3)$   
(B)  $(8/3, 20/3)$  (D)  $(4/3, 20/3)$

**[Ans. A]**

62. If  $|4X - 7| = 5$  then the values of  $2|X| - |-X|$  is:
- (A) 2, 1/3 (C) 3/2, 9  
(B) 1/2, 3 (D) 2/3, 9

**[Ans. B]**

63. Following table provides figures (in rupees) on annual expenditure of a firm for two years – 2010 and 2011.

Category	2010	2011
Raw material	5200	6240
Power & fuel	7000	9450
Salary & wages	9000	12600
Plant & machinery	20000	25000
Advertising	15000	19500
Research & Development	22000	26400

In 2011, which of the following two categories have registered increase by same percentage?

- (A) Raw material and Salary & wages  
(B) Salary & wages and Advertising  
(C) Power & fuel and Advertising  
(D) Raw material and Research & Development
64. A firm is selling its product at ₹ 60 per unit. The total cost of production is ₹ 100 and firm is earning total profit of ₹ 500. Later, the total cost increased by 30%. By what percentage the price should be increased to maintain the same profit level.
- (A) 5 (C) 15  
(B) 10 (D) 30

**[Ans. A]**

65. Abhishek is elder to Savar, Savar is younger to Anshul. The correct relations is
- (A) Abhishek is elder to Anshul  
(B) Anshul is elder to Abhishek  
(C) Abhishek and Anshul are of same age  
(D) No conclusion can be drawn

**[Ans. D]**